



Revision worksheet 2

Grade : 2

Subject: Math

Name: _____

Date: _____

I. Answer the following

(4X2=8)

1. Expand the following

a. $648 =$ _____

b. $389 =$ _____

2. Write the number name

a. $273 =$ _____

b. $896 =$ _____

3. Tick the notes and coins to form the given amount. Try to use fewer notes and coins to make the amount.

₹35









4.

₹91



II. Match the following

(1X3=3)

Acti
-otc

III. Complete the table**(3X3=9)**

1. write the given number is odd or even

17	
6	
4	

2. Write face and place value of the underlined digit in the given number

Number	face value	place value
68 <u>7</u>		
<u>7</u> 32		
9 <u>9</u> 9		

3. What notes and coins would you combine to make the given amount?

₹765	way 1	way 2